

HOW WE SPEND OUR MONEY

ACTIVITY SHEET

MONEY MINDS

LIKES & NEEDS

The pictures below show some things we'd **like** to have and some things that we **need**. Circle the things that we **need**



WHO NEEDS WHAT ACTIVITY SHEET

MONEY MINDS

LIKES & NEEDS


Draw a line from one box to another, to identify who **needs** what ...




Baby



Child



Plant



Pet Fish



False Teeth



Milk




Toys



Plant Pot



Food



Fish Bowl



Nappies



Water

CINEMA CHOICES ACTIVITY SHEET

MONEY MINDS

LIKES & NEEDS

Imagine you are going to the cinema. Decide on up to four items you **need** or would **like** for your cinema trip and circle these




Popcorn



Ice Cream




Sweets



Hot Dog




Nachos



Drink



Slush



Chocolate



Crisps



Ticket



VIP Seat



3D Movie

CINEMA CHOICES ACTIVITY SHEET

You have £10... Looking at the below list of items, could you have all the items you that you want? Do you have enough for all of these items? What do you **need**? What would you **like**? Use the next page to work out your spends.



Item	Cost
Popcorn	£3



Ice-Cream	£3
-----------	----




Sweets	£3
--------	----



Hot Dog	£3
---------	----



Nachos	£3
--------	----



Drink	£2
-------	----



Slush	£2
-------	----



Chocolate	£2
-----------	----



Crisps	£2
--------	----



1 Ticket	£4
----------	----



VIP Seat	£1
----------	----



3D Movie	£1
----------	----

CINEMA CHOICES ACTIVITY SHEET

Use this side to work out how much you have spent

Item Chosen	Price
	+
	+
	+
	+
TOTAL =	£

Item Chosen	Price
	+
	+
	+
	+
TOTAL =	£